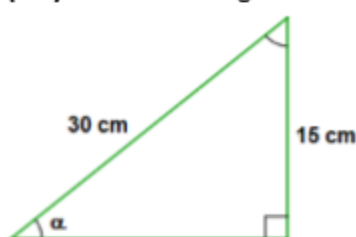


TRIGONOMETRY TEST – 4º ESO

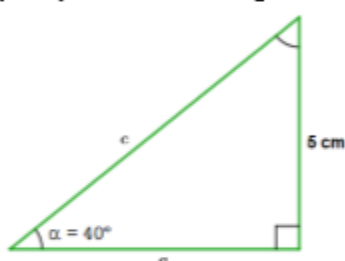
Exercise 1: (2.25 ptos)

a) (1.5) Find the six trigonometric functions of the angle α . You cannot use Pythagoras' theorem.



$$\begin{aligned}\sin \alpha &= \frac{1}{2} & \cos \alpha &= \frac{\sqrt{3}}{2} & \tan \alpha &= \frac{\sqrt{3}}{3} \\ \csc \alpha &= 2 & \sec \alpha &= \frac{2\sqrt{3}}{3} & \cot \alpha &= \sqrt{3}\end{aligned}$$

b) (0.75) Find the missing sides. You cannot use Pythagoras' theorem.



$$\begin{aligned}c &= 7.78 \text{ cm} \\ a &= 5.96 \text{ cm}\end{aligned}$$

Exercise 2: (1 pto) Find the three principal trigonometric functions (sine, cosine and tangent) of the angle 240° , without using a calculator

$$\sin 240^\circ = \frac{-\sqrt{3}}{2} \quad \cos 240^\circ = \frac{-1}{2} \quad \tan 240^\circ = \sqrt{3}$$

Exercise 3: (1.5 ptos) If $\tan \alpha = 3$ and $0^\circ < \alpha < 90^\circ$, find the values of the other five trigonometric functions without using a calculator.

$$\cos \alpha = \frac{\sqrt{10}}{10} \quad \sin \alpha = \frac{3\sqrt{10}}{10} \quad \csc \alpha = \frac{\sqrt{10}}{3} \quad \sec \alpha = \sqrt{10} \quad \cot \alpha = \frac{1}{3}$$

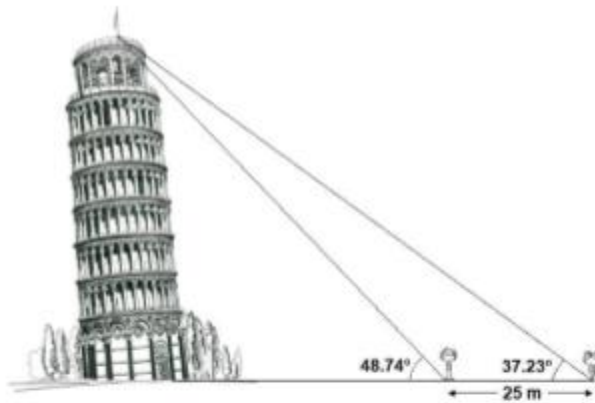
Exercise 4: (1.25 ptos) If $\cos \alpha = 0.62$ and $270^\circ < \alpha < 360^\circ$ find the values of $\sin \alpha$ and $\tan \alpha$ and the value of the angle α

$$\sin \alpha = -0.78 \quad \tan \alpha = -1.27 \quad \alpha = 308.32^\circ$$

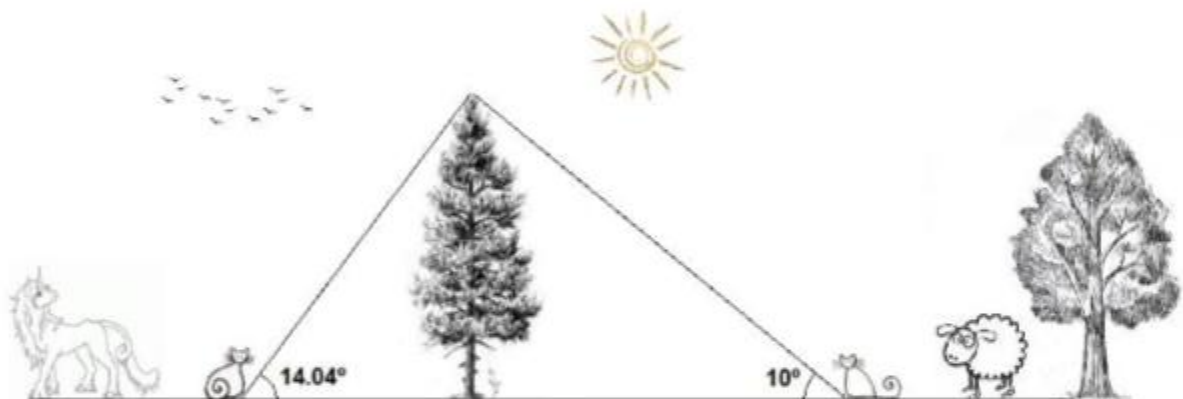
Exercise 5: (1 pto) The base of an isosceles triangle is 40 cm long and the angle between the two equal sides is 30° . Find the area of the triangle. $A_T = 1492.82 \text{ cm}^2$



Exercise 6: (2 pts) Find the height of the Leaning Tower of Pisa $h = 57$ m



Exercise 7: (1 pt) Find the distance between the cats if the tree is 3 m high $d = 29.01$ m



PS: I am bored

